

Quiz 8 – November 3, 2016

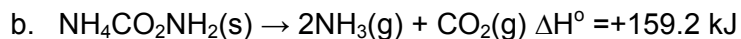
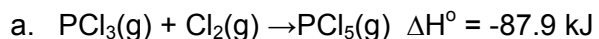
Complete the following problems. Write your final answers in the blanks provided.

1. From the information in the table below, determine the ΔG° for the following reaction. (8 pts)
- $$2\text{H}_2(\text{g}) + \text{O}_2(\text{g}) \rightarrow 2\text{H}_2\text{O}(\text{g})$$

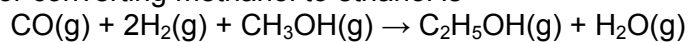
Reaction	ΔG°
$\text{N}_2(\text{g}) + \text{O}_2(\text{g}) \rightarrow 2\text{NO}(\text{g})$	+173.1 kJ
$4\text{NH}_3(\text{g}) + 5\text{O}_2(\text{g}) \rightarrow 4\text{NO}(\text{g}) + 6\text{H}_2\text{O}(\text{g})$	-1010.5 kJ
$\text{N}_2(\text{g}) + 3\text{H}_2(\text{g}) \rightarrow 2\text{NH}_3(\text{g})$	-33.0 kJ
$2\text{N}_2(\text{g}) + \text{O}_2(\text{g}) \rightarrow 2\text{N}_2\text{O}(\text{g})$	+208.4 kJ

Answer _____

2. For each of the reactions below, select which of the following describes the reaction and justify your assertion in a sentence or two. (a) spontaneous at all temperatures, (b) nonspontaneous at all temperatures, (c) spontaneous at high temperatures, (d) spontaneous at low temperatures, (e) unable to tell. (8 pts)



3. A possible reaction for converting methanol to ethanol is



Use the information below to calculate ΔG° and determine whether the reaction is spontaneous under standard conditions at 25°C. Is there a temperature where the sign of ΔG° changes? (9 pts)

Compound	$\Delta H^\circ_f, \text{kJ mol}^{-1}$	$\Delta G^\circ_f, \text{kJ mol}^{-1}$	$S^\circ_f, \text{J mol}^{-1} \text{K}^{-1}$
CO(g)	-110.5	-137.2	+197.7
H ₂ (g)	0	0	+130.7
CH ₃ OH(g)	-200.7	-162.0	+239.8
C ₂ H ₅ OH(g)	-235.1	-168.5	+282.7
H ₂ O(g)	-241.8	-228.6	+188.8

Answer_____

Possibly Useful Information

$K = ^\circ\text{C} + 273.15$	$q = mc\Delta T$	$q = n_{\text{LR}}\Delta H_{\text{rxn}}$	$q = m\Delta H$
$\Delta S_{\text{universe}} = \Delta S_{\text{system}} - \Delta S_{\text{surr}}$		$\Delta G = \Delta H - T\Delta S$	$\Delta S_{\text{surr}} = -\Delta H_{\text{sys}}/T$

1 1A	2 2A																18 8A								
1 H 1.00794																	13 3A	14 4A	15 5A	16 6A	17 7A	18 8A			
3 Li 6.941	4 Be 9.01218																	5 B 10.811	6 C 12.011	7 N 14.0067	8 O 15.9994	9 F 18.9984	10 Ne 20.1797		
11 Na 22.9898	12 Mg 24.3050	3 3B	4 4B	5 5B	6 6B	7 7B	8 8B	9 9B	10 10B	11 11B	12 12B	13 Al 26.9815	14 Si 28.0855	15 P 30.9738	16 S 32.066	17 Cl 35.4527	18 Ar 39.948								
19 K 39.0983	20 Ca 40.078	21 Sc 44.9559	22 Ti 47.88	23 V 50.9415	24 Cr 51.9961	25 Mn 54.9381	26 Fe 55.847	27 Co 58.9332	28 Ni 58.693	29 Cu 63.546	30 Zn 65.39	31 Ga 69.723	32 Ge 72.61	33 As 74.9216	34 Se 78.96	35 Br 79.904	36 Kr 83.80								
37 Rb 85.4678	38 Sr 87.62	39 Y 88.9059	40 Zr 91.224	41 Nb 92.9064	42 Mo 95.94	43 Tc (98)	44 Ru 101.07	45 Rh 102.906	46 Pd 106.42	47 Ag 107.868	48 Cd 112.411	49 In 114.818	50 Sn 118.710	51 Sb 121.757	52 Te 127.60	53 I 126.904	54 Xe 131.29								
55 Cs 132.905	56 Ba 137.327	57 *La 138.906	72 Hf 178.49	73 Ta 180.948	74 W 183.84	75 Re 186.207	76 Os 190.23	77 Ir 192.22	78 Pt 195.08	79 Au 196.967	80 Hg 200.59	81 Tl 204.383	82 Pb 207.2	83 Bi 208.980	84 Po (209)	85 At (210)	86 Rn (222)								
87 Fr (223)	88 Ra 226.025	89 †Ac 227.028	104 Rf (261)	105 Db (262)	106 Sg (266)	107 Bh (264)	108 Hs (277)	109 Mt (268)	110 Ds (271)	111 Rg (272)															
*Lanthanide series												58 Ce 140.115	59 Pr 140.908	60 Nd 144.24	61 Pm (145)	62 Sm 150.36	63 Eu 151.965	64 Gd 157.25	65 Tb 158.925	66 Dy 162.50	67 Ho 164.930	68 Er 167.26	69 Tm 168.934	70 Yb 173.04	71 Lu 174.967
†Actinide series												90 Th 232.038	91 Pa 231.036	92 U 238.029	93 Np 237.048	94 Pu (244)	95 Am (243)	96 Cm (247)	97 Bk (247)	98 Cf (251)	99 Es (252)	100 Fm (257)	101 Md (258)	102 No (259)	103 Lr (262)

Copyright © 2007 Pearson Prentice Hall, Inc.